

PRACTICE TEST

# Mathematics

## Grade 6

---

Student Name

---

School Name

---

District Name



**RIDE** Rhode Island  
Department  
of Education

# Grade 6 Mathematics

## SESSION 1

This session contains 8 questions.

*You may use your reference sheet during this session.  
You may **not** use a calculator during this session.*



### Directions

Read each question carefully and then answer it as well as you can. You must record all answers in this Practice Test Booklet.

For some questions, you will mark your answers by filling in the circles in your Practice Test Booklet. Make sure you darken the circles completely. Do not make any marks outside of the circles. If you need to change an answer, be sure to erase your first answer completely.

For other questions, you will need to fill in an answer grid. Directions for completing questions with answer grids are provided on the next page.

If a question asks you to show or explain your work, you must do so to receive full credit. Write your response in the space provided. Only responses written within the provided space will be scored.

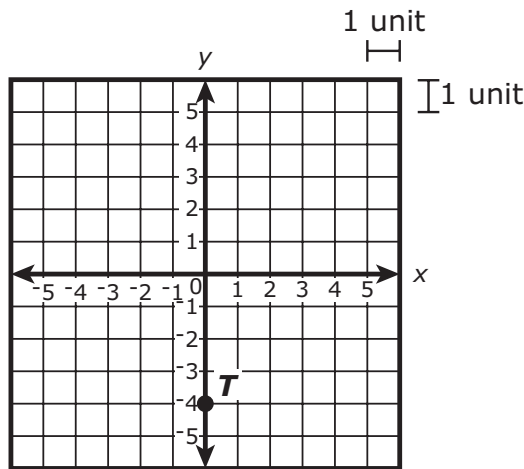


- 1 A dairy farmer delivered milk over two days.
- On Monday, he used 5 gallons of fuel to drive 40 miles.
  - On Tuesday, he drove 120 miles at an average rate of 10 miles per gallon of fuel.

Which of the following sentences about the miles traveled per gallon of fuel on Monday **and** the number of gallons of fuel used on Tuesday is true?

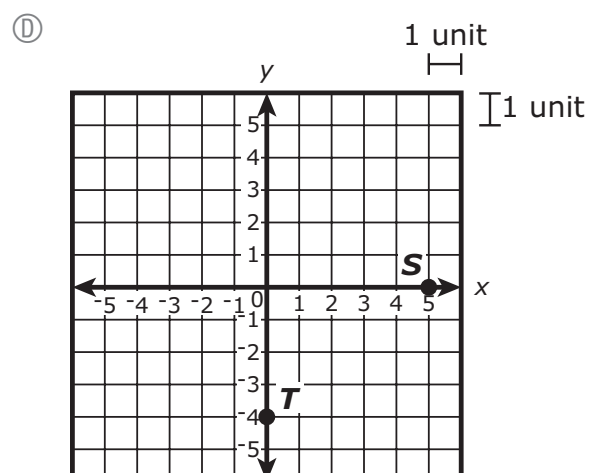
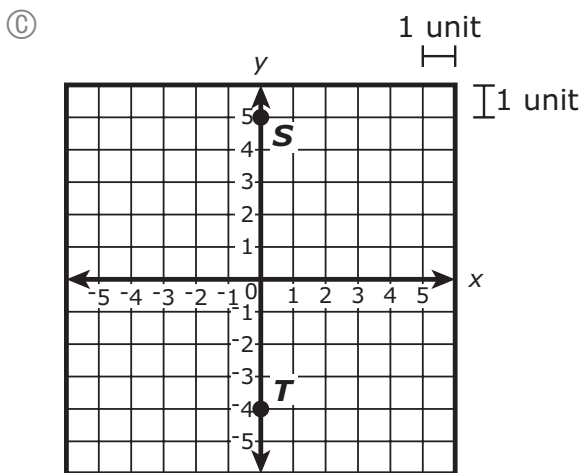
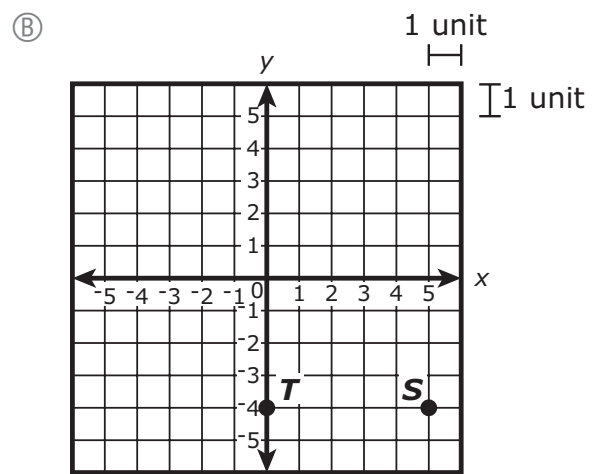
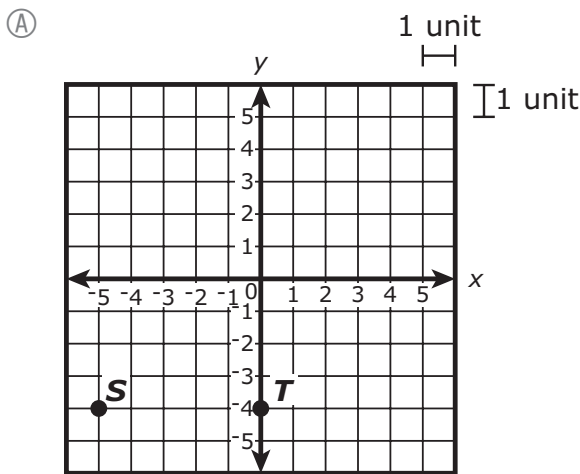
- Ⓐ The dairy farmer drove at an average rate of 8 miles per gallon of fuel on Monday, and used a total of 12 gallons of fuel on Tuesday.
- Ⓑ The dairy farmer drove at an average rate of 0.125 miles per gallon of fuel on Monday, and used a total of 0.1 gallon of fuel on Tuesday.
- Ⓒ The dairy farmer drove at an average rate of 40 miles per gallon of fuel on Monday, and used a total of 120 gallons of fuel on Tuesday.
- Ⓓ The dairy farmer drove at an average rate of 5 miles per gallon of fuel on Monday, and used a total of 10 gallons of fuel on Tuesday.

- 2 The location of point  $T$  is shown on this coordinate plane.



Point  $S$  is located 5 units to the right of point  $T$ .

Which of the following graphs shows the location of point  $S$ ?

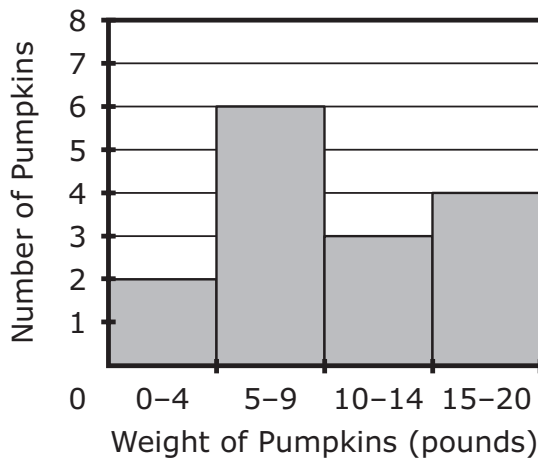


- 3 This table shows the weight, in pounds, of 15 pumpkins that are for sale at a farm.

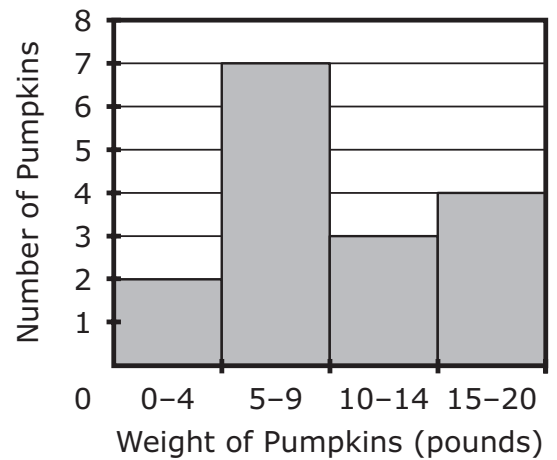
5	18	6	12	10
8	13	7	9	4
16	4	11	7	15

Which of the following histograms correctly represents the data?

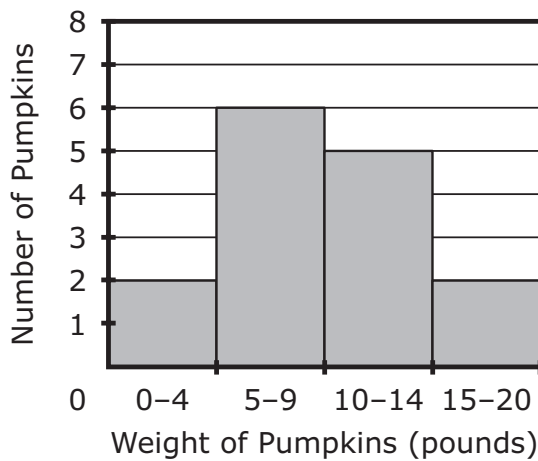
(A) Pumpkins for Sale



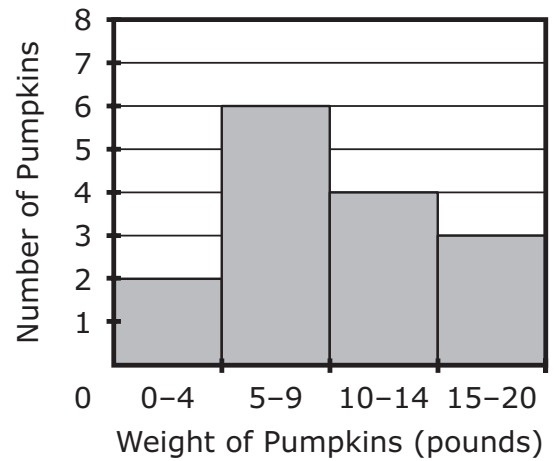
(B) Pumpkins for Sale



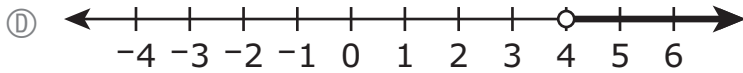
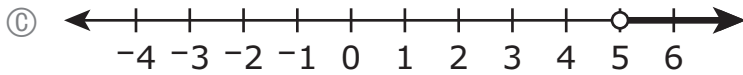
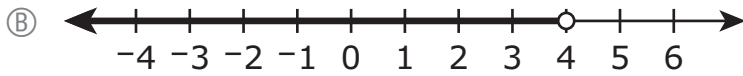
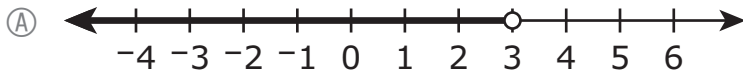
(C) Pumpkins for Sale



(D) Pumpkins for Sale



4 Which of the following number lines shows the solution set for  $x < 4$ ?



5 Which of the following division equations are true?

Select the **two** division equations that are true.

(A)  $128 \div 16 = 8$

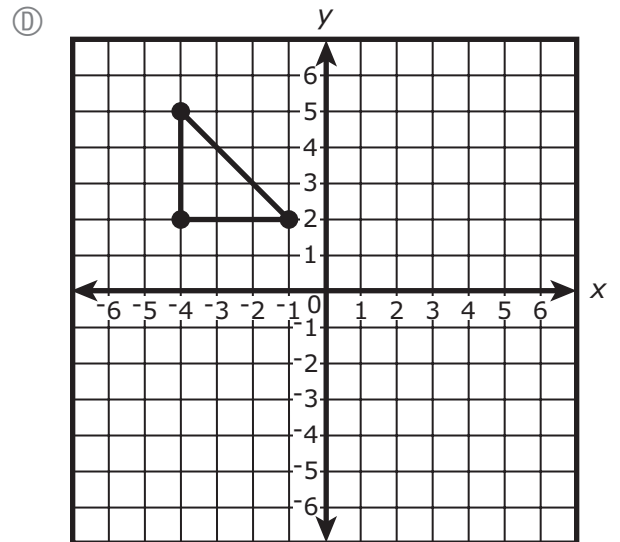
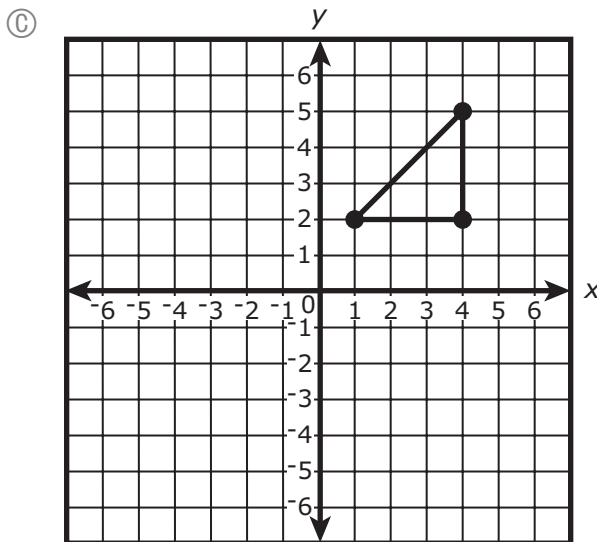
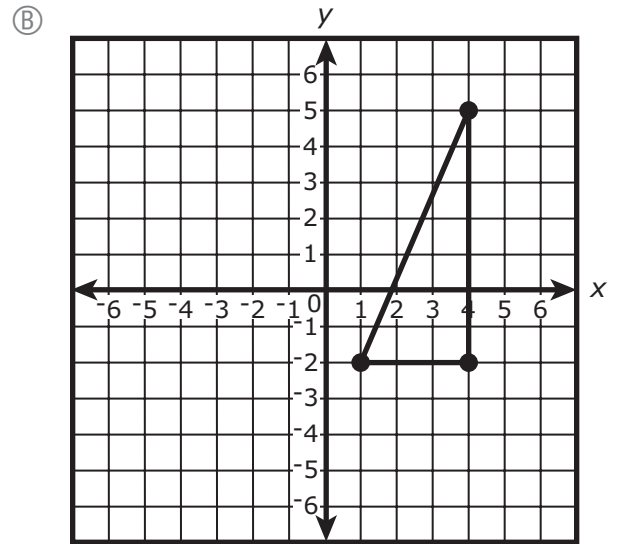
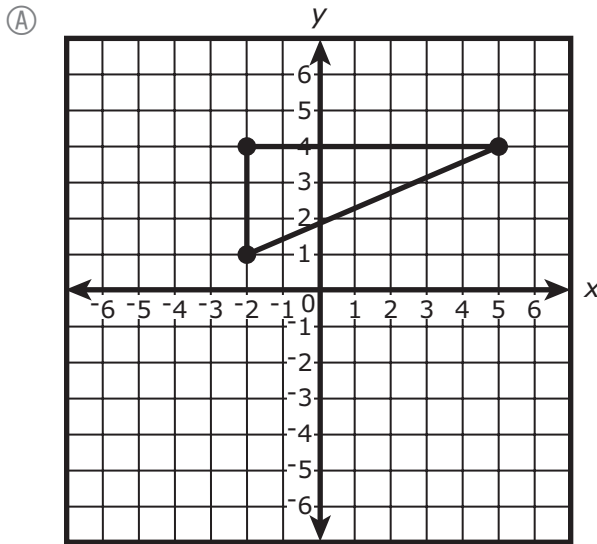
(B)  $276 \div 9 = 35$

(C)  $684 \div 6 = 228$

(D)  $749 \div 11 = 43$

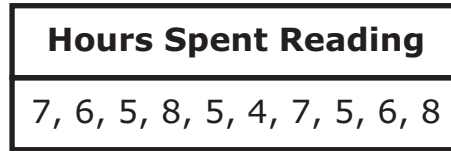
(E)  $684 \div 3 = 228$

- 6 Which of the following graphs shows a triangle with vertices located at  $(4, -2)$ ,  $(1, -2)$ , and  $(4, 5)$  on the coordinate plane?

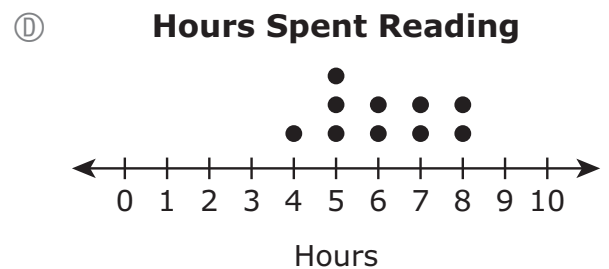
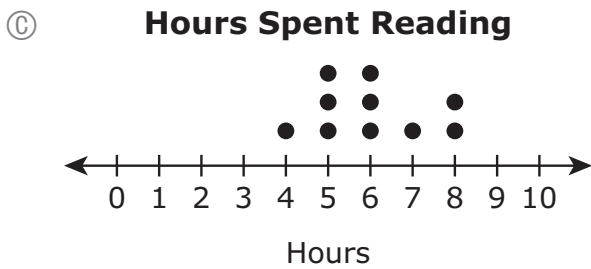
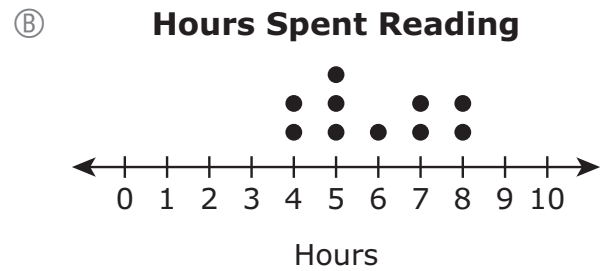




- 7 A student asks 10 classmates how many hours they each spent reading last week. The student creates this chart to show the responses.



Which dot plot shows the number of hours the classmates spent reading last week?



This question has three parts. Be sure to label each part of your response.

- 8 This table shows the amount, in pounds, of snow that Andy can remove over time using a shovel.

**Snow Removal Using a Shovel**

<b>Time (minutes)</b>	1	2	3	4	5	6
<b>Snow Removed (pounds)</b>	80	160	240	320		480

- A. Based on the table, what is the amount, in pounds, of snow that Andy can remove in 5 minutes using a shovel? Show or explain how you got your answer.
- B. On the coordinate plane provided in your answer space, plot the data from the table to show the amount of snow that Andy can remove over time.
- C. Based on your graph in Part B, what is the amount, in pounds, of snow that Andy can remove in 7 minutes? Show or explain how you got your answer.

8

---

---

---

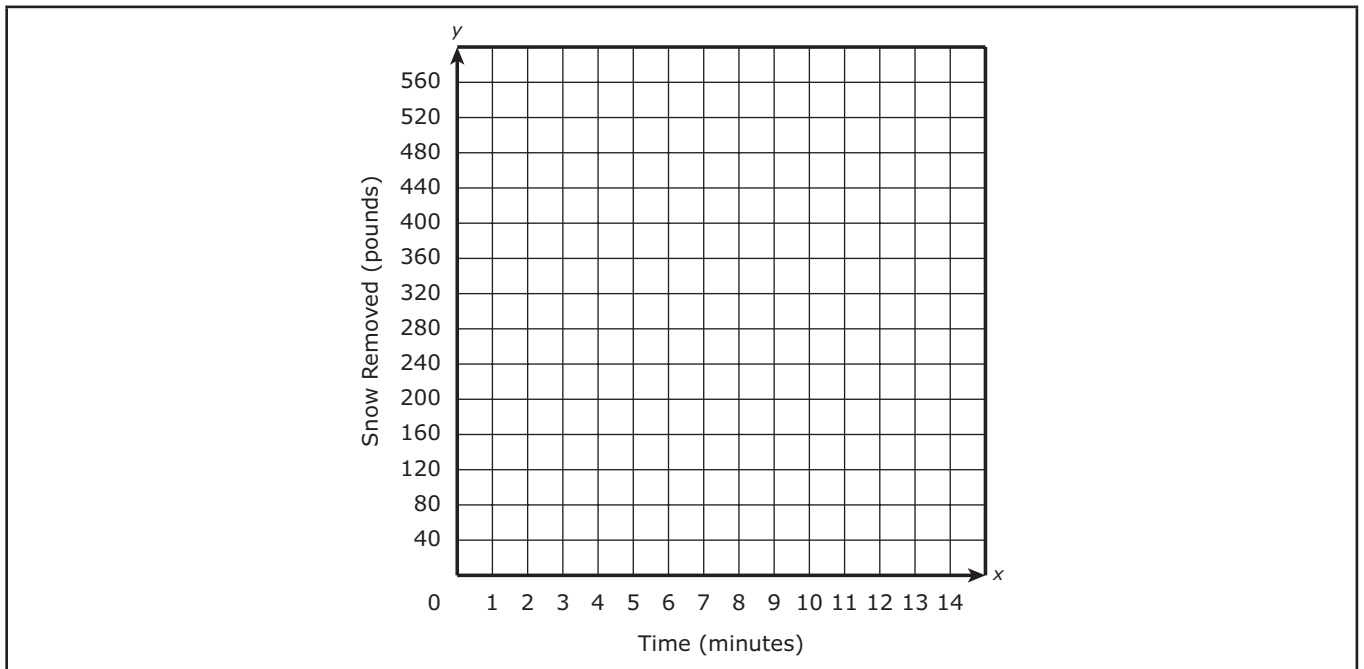
---

---

---

---

---



---

---

---

---

---

---

---

---



# Grade 6 Mathematics

## SESSION 2

This session contains 8 questions.

*You may use your reference sheet during this session.  
You may **not** use a calculator during this session.*



### Directions

Read each question carefully and then answer it as well as you can. You must record all answers in this Practice Test Booklet.

For some questions, you will mark your answers by filling in the circles in your Practice Test Booklet. Make sure you darken the circles completely. Do not make any marks outside of the circles. If you need to change an answer, be sure to erase your first answer completely.

For other questions, you will need to fill in an answer grid. Directions for completing questions with answer grids are provided on the next page.

If a question asks you to show or explain your work, you must do so to receive full credit. Write your response in the space provided. Only responses written within the provided space will be scored.



- 9 The table shows the colors of 18 cars on the street.

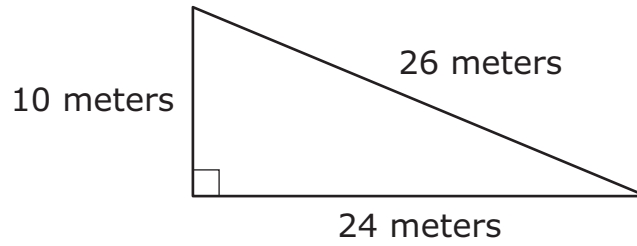
**Number of Cars of  
Each Color**

Car Color	Number
Red	6
Blue	4
Black	3
White	5

Based on the information shown in the table, what could the ratio 3:6 describe?

- (A) The ratio 3:6 could describe the number of red cars to the number of black cars on the street.
- (B) The ratio 3:6 could describe the number of blue cars to the number of white cars on the street.
- (C) The ratio 3:6 could describe the number of black cars to the number of red cars on the street.
- (D) The ratio 3:6 could describe the number of white cars to the number of blue cars on the street.

- 10 A right triangle and its dimensions are shown in this diagram.



What is the area, in square meters, of the triangle?

Enter your answer in the answer boxes at the top of the answer grid **and** completely fill the matching circles.

−							
•	•	•	•	•	•	•	•
0	0	0	0	0	0	0	0
1	1	1	1	1	1	1	1
2	2	2	2	2	2	2	2
3	3	3	3	3	3	3	3
4	4	4	4	4	4	4	4
5	5	5	5	5	5	5	5
6	6	6	6	6	6	6	6
7	7	7	7	7	7	7	7
8	8	8	8	8	8	8	8
9	9	9	9	9	9	9	9

- 11 A student earns \$12 each time he shovels his neighbor's driveway. He earned a total of \$108 shoveling the driveway last winter. Which of the following equations could be used to find  $w$ , the number of times the student shoveled his neighbor's driveway last winter?

(A)  $108w = 12$

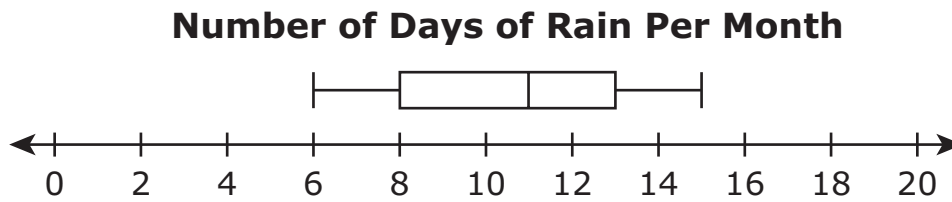
(B)  $12w = 108$

(C)  $w + 12 = 108$

(D)  $108 + w = 12$



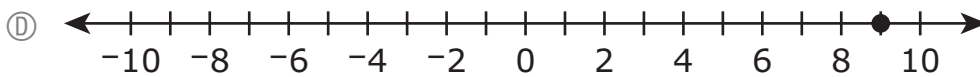
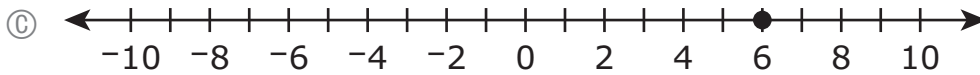
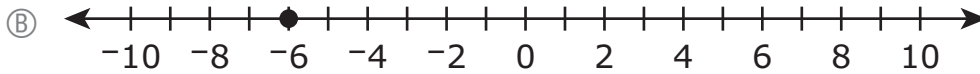
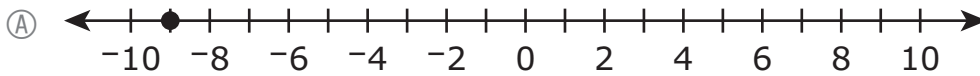
- 12 Luke recorded the number of days it rained each month for 12 months. He made a box plot to represent the data, as shown.



What is the interquartile range of the data in Luke's box plot?

- (A) 11
- (B) 9
- (C) 8
- (D) 5

- 13 Which of the following plotted points represents the location of the number that is the opposite of  $-9$ ?



- 14 Which of the following equations with exponential expressions are true?

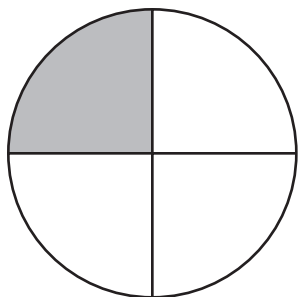
Select the **three** correct equations.

- (A)  $2^3 = 2 \cdot 2 \cdot 2$   
(B)  $3^2 = 2 \cdot 2$   
(C)  $4^5 = 4 \cdot 4 \cdot 4 \cdot 4 \cdot 4$   
(D)  $5 \cdot 5 = 2^5$   
(E)  $6 \cdot 6 \cdot 6 = 6^3$   
(F)  $7 \cdot 7 \cdot 7 \cdot 7 \cdot 7 \cdot 7 \cdot 7 = 7^1$

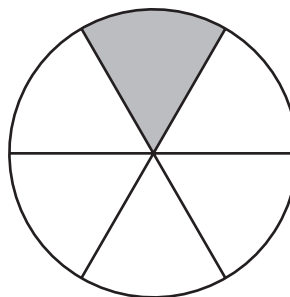
- 15 A group of 4 students will share  $\frac{8}{12}$  of a pizza. Each student will receive the same amount of pizza.

Which of the following models is shaded to represent the fraction of the pizza that each of the 4 students will receive?

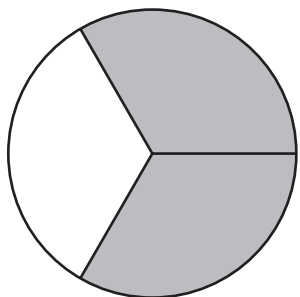
(A)



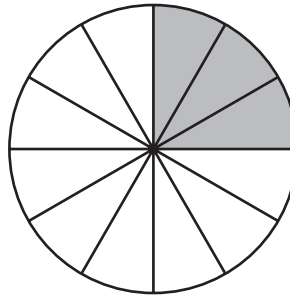
(B)



(C)

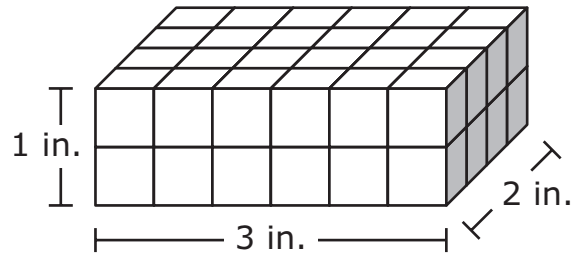


(D)



This question has two parts.

- 16 A student used congruent cubes to build a right rectangular prism. The prism and its dimensions are shown in this diagram.



**Part A**

What is the volume, in cubic inches, of the prism?

- (A) 6
- (B) 12
- (C) 36
- (D) 48

**Part B**

What is the volume, in cubic inches, of 1 of the cubes?

- (A) 1
- (B)  $\frac{1}{2}$
- (C)  $\frac{1}{4}$
- (D)  $\frac{1}{8}$

